


Fractions

Cut the shapes into the fraction. Shade in the fraction.
Then tell what the fraction is using words like halves, thirds, whole etc..



1. $\frac{4}{4}$



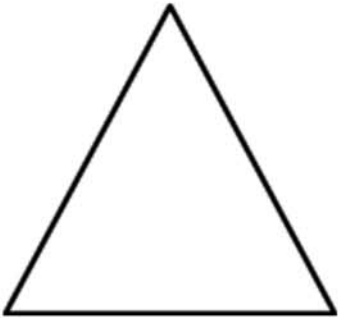
2. $\frac{1}{2}$




3. $\frac{3}{4}$



4. $\frac{1}{4}$



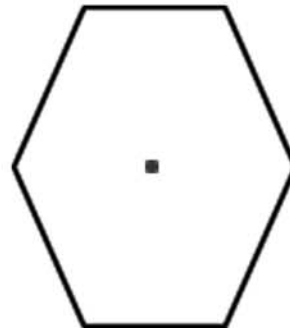
5. $\frac{1}{2}$



6. $\frac{2}{2}$



7. $\frac{3}{3}$



8. $\frac{5}{6}$
