

Name: _____

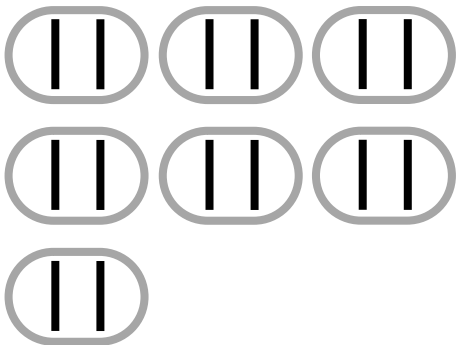
Date: _____

C.C. Math Standard 3.OA.2

Divide by 2

Make equal groups to divide.

$14 \div 2 = 7$



$8 \div 2 =$

$16 \div 2 =$

$10 \div 2 =$

$6 \div 2 =$

$2 \div 2 =$

$4 \div 2 =$

$12 \div 2 =$

$18 \div 2 =$

Name: _____

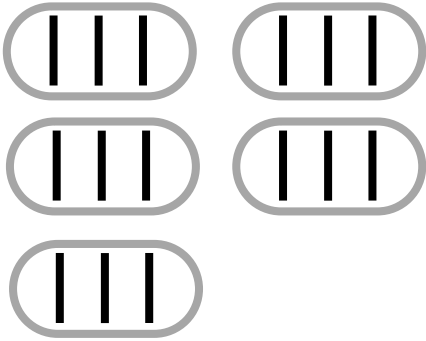
Date: _____

C.C. Math Standard 3.OA.2

Divide by 3

Make equal groups to divide.

$15 \div 3 = 5$



$18 \div 3 =$

$24 \div 3 =$

$12 \div 3 =$

$6 \div 3 =$

$27 \div 3 =$

$3 \div 3 =$

$21 \div 4 =$

$9 \div 3 =$

Name: _____

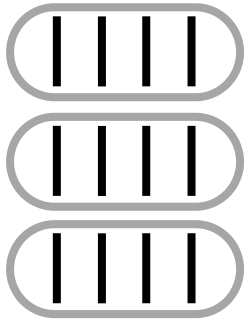
Date: _____

C.C. Math Standard 3.OA.2

Divide by 4

Make equal groups to divide.

$12 \div 4 = 3$



$16 \div 4 =$

$24 \div 4 =$

$32 \div 4 =$

$8 \div 4 =$

$20 \div 4 =$

$36 \div 4 =$

$28 \div 4 =$

$4 \div 4 =$